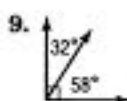
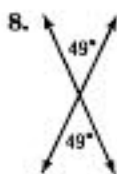
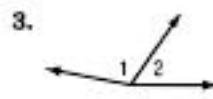
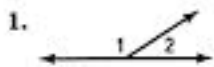


## Lesson 2 Skills Practice

### Complementary and Supplementary Angles

Identify each pair of angles as *complementary*, *supplementary*, or *neither*.



**ALGEBRA** Find the value of  $x$  in each figure.

