

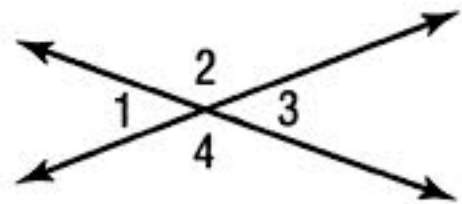
Name _____ Chapter 7 Quiz (7.1-7.3)

Directions: Work through each question in PENCIL. Circle or square each of your answers.

Use the figure to answer the following questions. (1 point each)

1. Name a pair of vertical angles

2. Name a pair of adjacent angles

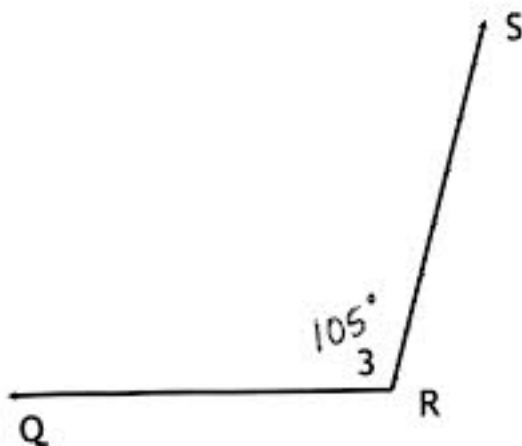


CLASSIFY each of the following angles (name the type).

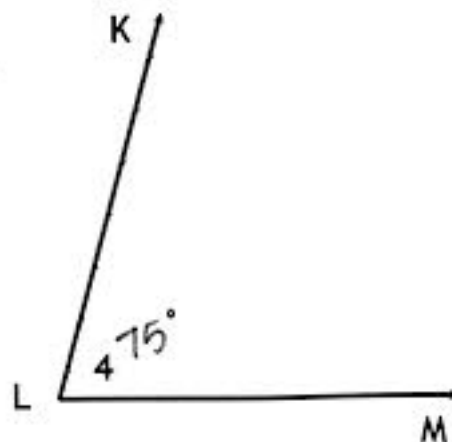
Name the angle FOUR different ways.

Give the MEASURE of each angle. (4 points each/1 point for #5)

3.



4.



5. Together, the angles in problems 3 and 4 are _____.