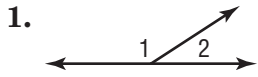


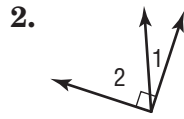
# Lesson 2 Skills Practice

## Complementary and Supplementary Angles

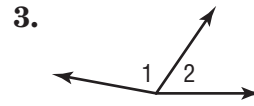
Identify each pair of angles as *complementary*, *supplementary*, or *neither*.



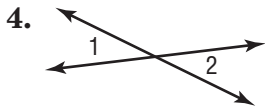
supplementary



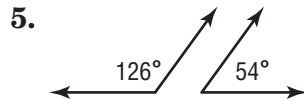
complementary



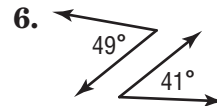
neither



neither



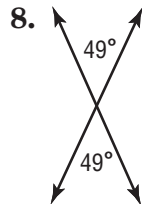
supplementary



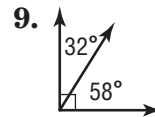
complementary



supplementary

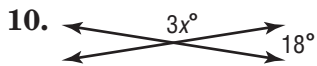


neither

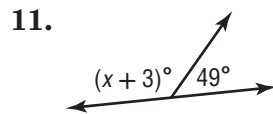


complementary

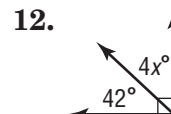
ALGEBRA Find the value of  $x$  in each figure.



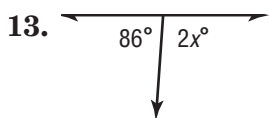
54



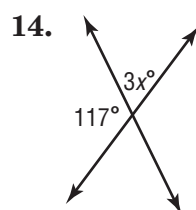
128



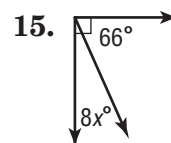
12



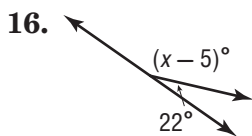
47



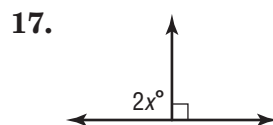
21



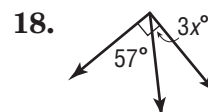
3



163



45



11